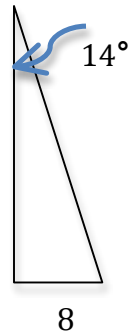
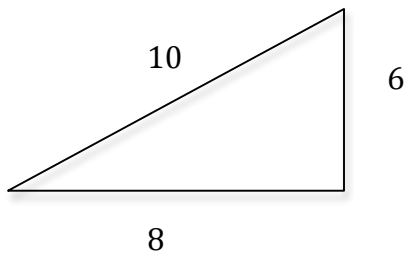
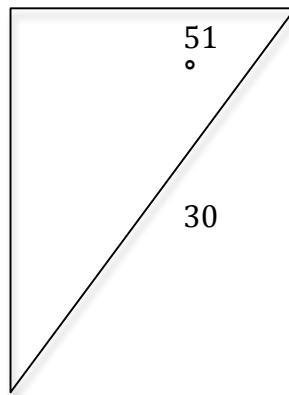
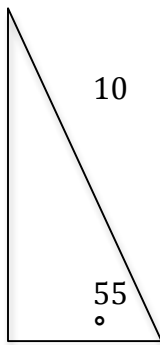
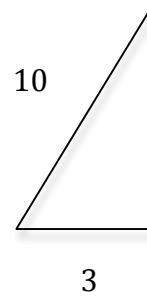
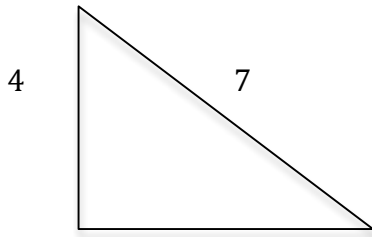


## Trig Review and Drawing Vectors

Solve each triangle



Draw the following vectors

1. 70 steps North
2. 180 lbs. SE
3. 19 steps  $37^\circ$  South of West
4. 41 m W
5. 10.5 m/s NW
6. 4.5 m/s  $20^\circ$  N of E